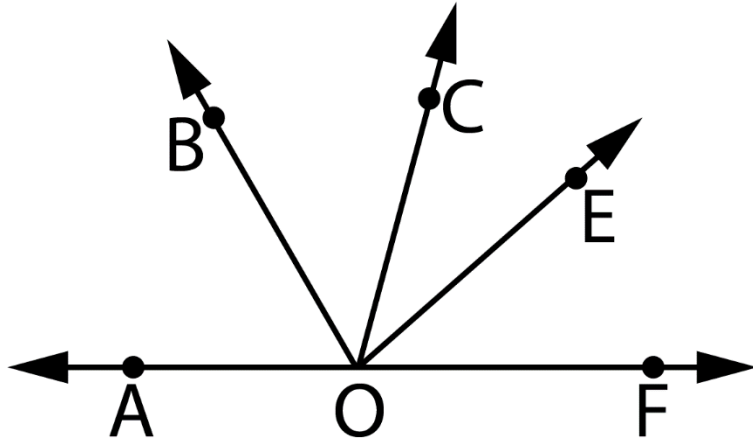


7. SINIF 2023 GENEL TEKRAR SORU

ÇÖZÜMÜ-12

Soru 1.



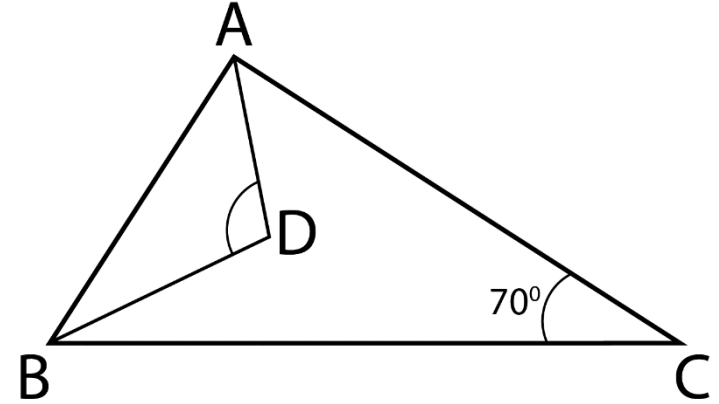
A, O, F noktaları doğrusaldır.

[OB, AOC açısının açıortayı,

[OE, COF açısının açıortayı ise BOE açısının ölçüsü kaç derecedir?

- A) 80° B) 90°
C) 120° D) 135°

Soru 2.

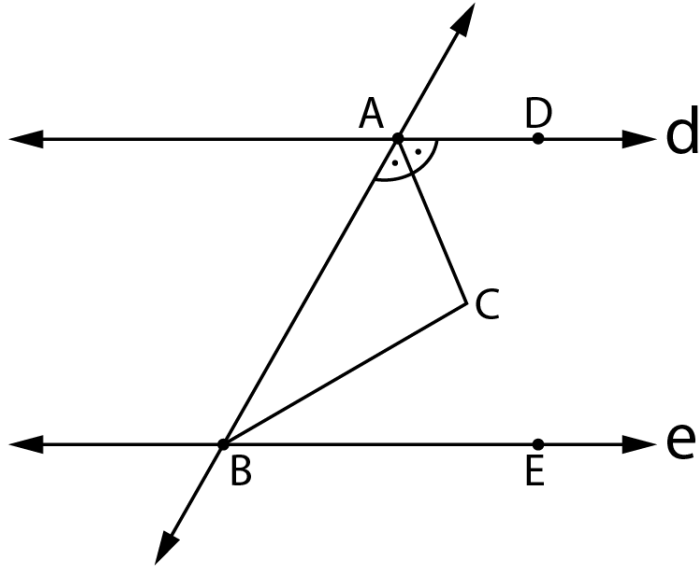


[AD] ve [BD] açıortay

$s(C)=70^{\circ}$ ise ADB açısının ölçüsü kaç derecedir?

- A) 120° B) 125° C) 130° D) 135°

Soru 3.



$d // e$

$s(\text{DAC}) = s(\text{CAB})$ ve

$s(\text{ABC}) = s(\text{CBE})$ ise

$s(\text{ACB}) = ?$

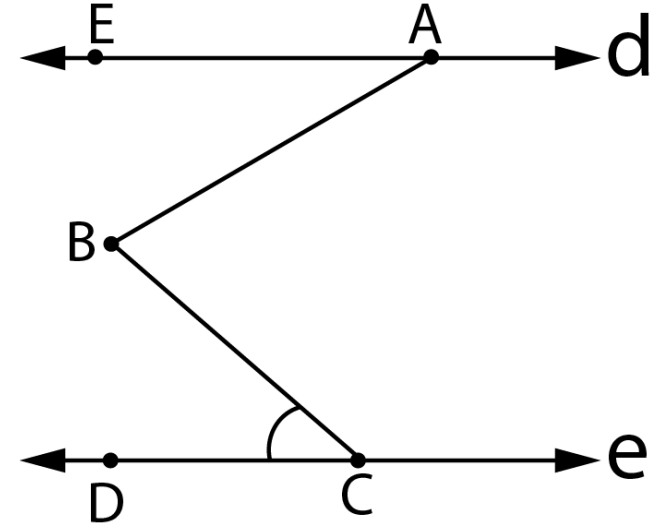
A) 85°

B) 90°

C) 100°

D) 120°

Soru 4.

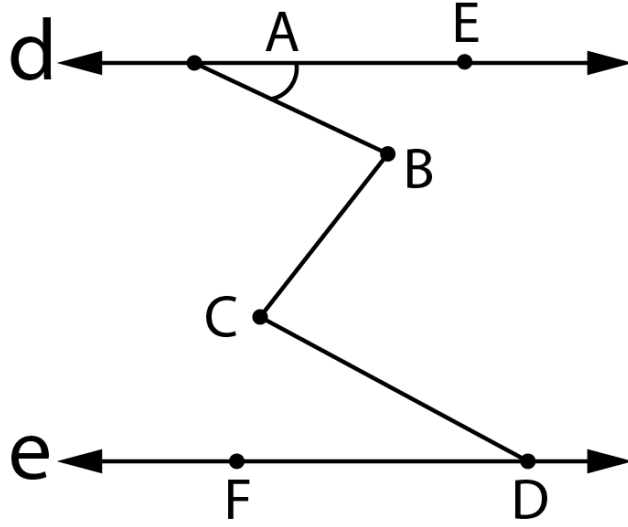


$d // e$

$s(\text{EAB}) = 40^\circ$ $s(\text{ABC}) = 70^\circ$ $s(\text{BCD}) = ?$

A) 20° B) 30° C) 40° D) 50°

Soru 5.



$d // e$

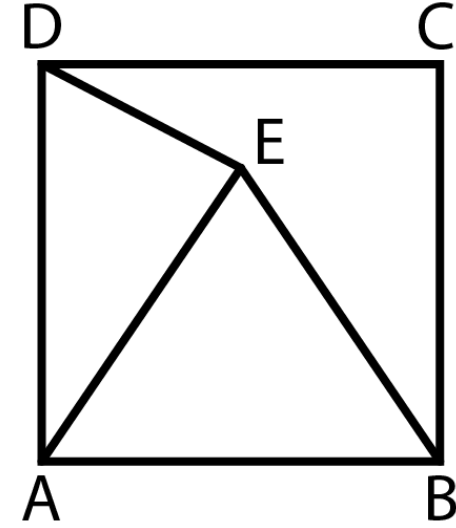
$$s(\text{EAB}) = 30^\circ$$

$$s(\text{ABC}) = 70^\circ$$

$$s(\text{BCD}) = 60^\circ \quad \text{ise } s(\text{CDE}) = ?$$

$$\text{A) } 15^\circ \quad \text{B) } 20^\circ \quad \text{C) } 30^\circ \quad \text{D) } 40^\circ$$

Soru 6.

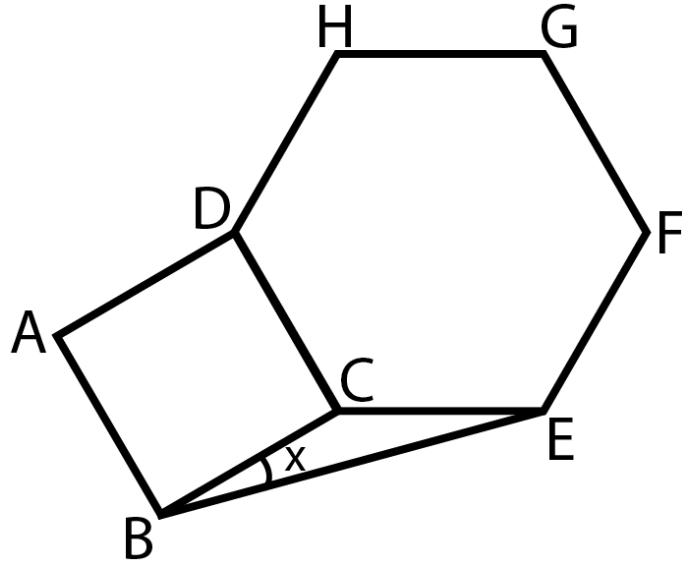


ABCD Kare,

ABE eşkenar üçgen ise $s(\text{EDC}) = ?$

$$\text{A) } 15^\circ \quad \text{B) } 20^\circ \quad \text{C) } 25^\circ \quad \text{D) } 30^\circ$$

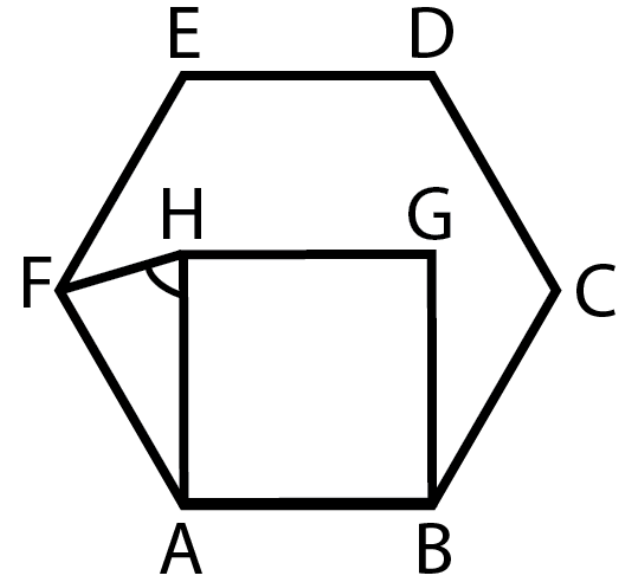
Soru 7.



ABCD Kare, DCEFGH düzgün altıgen ise $s(\text{CBE}) = ?$

- A) 15° B) 20° C) 30° D) 40°

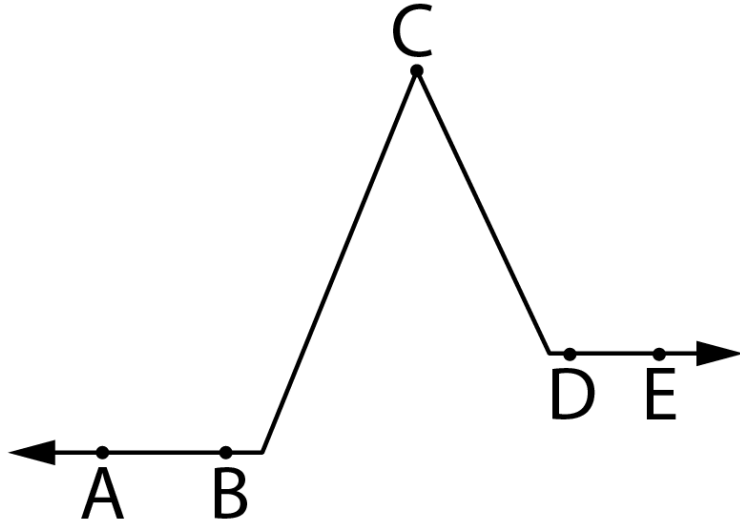
Soru 8.



ABCDEF düzgün altıgen, ABGH kare ise $s(\text{AHF}) = ?$

- A) 85° B) 75° C) 70° D) 60°

Soru 9.



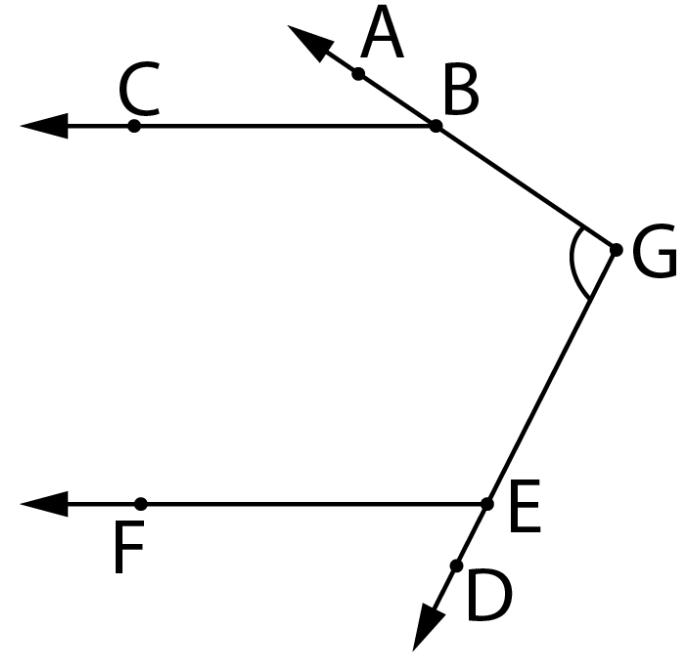
$[BA \parallel [DE$

$s(ABC) = 110^\circ$

$s(CDE) = 130^\circ$ ise $s(BCD) = ?$

- A) 50° B) 55° C) 60° D) 70°

Soru 10.



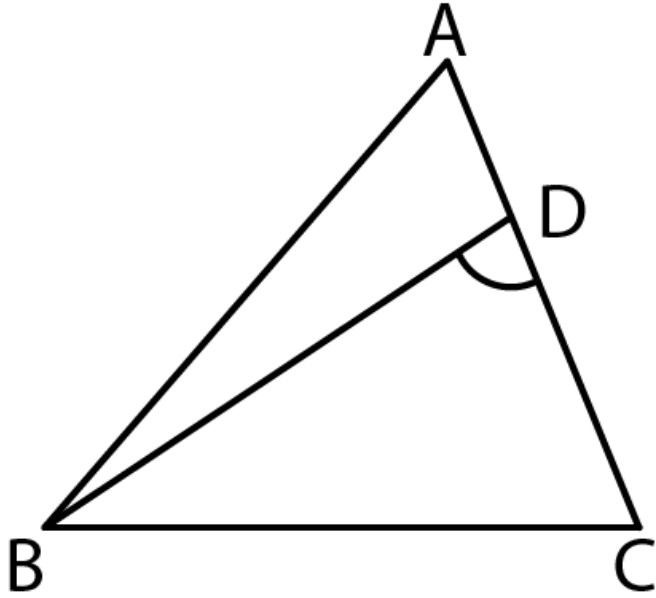
$[BC \parallel [EF$

$S(ABC) = 60^\circ$

$S(DEF) = 70^\circ$ ise $s(BGE) = ?$

- A) 120° B) 125° C) 130° D) 140°

Soru 11.

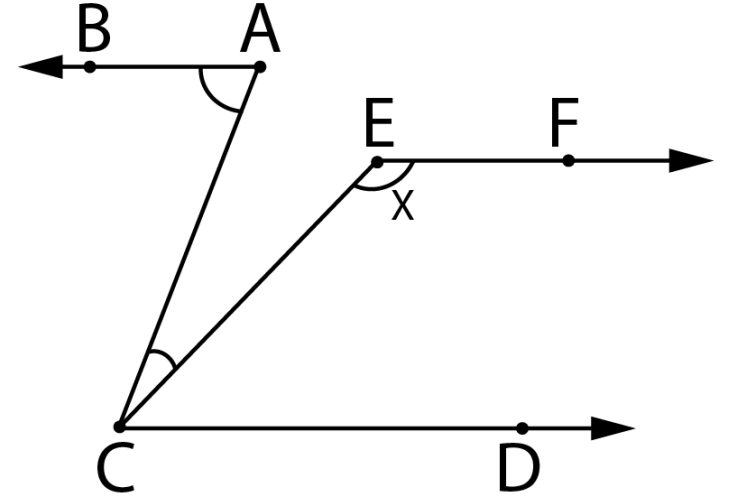


ABC'de $|AB|=|AC|$

[BD] açıortay $s(A) = 40^\circ$ ise $s(BDC) = ?$

- A) 90° B) 75° C) 70° D) 65°

Soru 12.



$[AB // [CD // [EF$

$s(BAC) = 70^\circ$

$s(ACE) = 15^\circ$ ise $s(CEF) = x = ?$

- A) 115° B) 120° C) 125° D) 130°